

# University of Nevada, Las Vegas Computer Science 456/656 Spring 2021

## Answers to Assignment 1. Due Tuesday February 9, 2021

Name: \_\_\_\_\_

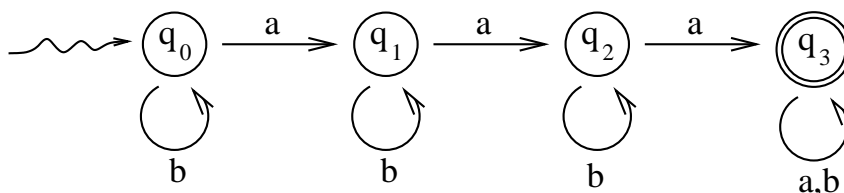
You are permitted to work in groups, get help from others, read books, and use the internet. Submit your completed homework to Canvas by 11:59 February 9. In each case, except for Problem 2, the identical problem is in both fifth and sixth editions.

1. Problem 11(d) on page 38 of the fifth edition, problem 14(d) on page 29 of the sixth edition.

If  $M = (Q, \Sigma, \delta, q_0, F)$  is an NFA, we can transform  $M$  to a regular grammar  $G$  which generates  $L(M)$ , as follows. There is a construction which uses  $M$  to define a regular grammar for  $L$ . There is one variable of  $G$  for each state of  $M$ , and there is one production of  $G$  for each transition (arc) of  $M$  and one production for each final state of  $M$ .

- (a) Let  $Q = \{q_0, q_1, \dots, q_k\}$ . The variables of  $G$  will be  $A_0, A_1, \dots, A_k$ , and  $A_0$  is the start symbol.
- (b) If  $M$  has a transition  $q_i \xrightarrow{a} q_j$  for  $a \in \Sigma$ , then  $G$  has a production  $A_i \rightarrow aA_j$ .
- (c) If  $M$  has a transition  $q_i \xrightarrow{\lambda} q_j$ , then  $G$  has a production  $A_i \rightarrow A_j$ .
- (d) If  $q_i \in F$ , then  $G$  has a production  $A_i \rightarrow \lambda$ .

The language consisting of all strings over  $\Sigma = \{a, b\}$  with at least 3  $a$ 's is accepted by the following DFA (which is, of course, also an NFA):



The grammar  $G$  obtained from  $M$  by the transformation given above has the productions:

- $A_0 \rightarrow bA_0|aA_1$
- $A_1 \rightarrow bA_1|aA_2$
- $A_2 \rightarrow bA_2|aA_3$
- $A_3 \rightarrow aA_3|bA_3|\lambda$

2. The versions in the two editions are slightly different. Work either one.

Problem 12 on page 38 of the fifth edition.

$$L(G) = \{(ab)^n : n \geq 0\}$$

problem 15 on page 29 of the sixth edition.

$$L(G) = \{(aab)^n : n \geq 0\}$$

3. Problem 13 on page 38 of the fifth edition, problem 16 on page 29 of the sixth edition.

$$L(G) = \emptyset \text{ (the empty language)}$$

4. Problem 14(a) on page 39 of the fifth edition, problem 17(a) on page 29 of the sixth edition.

$L_1$  is generated by the following grammar.

$$S \rightarrow aSb$$

$$S \rightarrow Tb$$

$$T \rightarrow Tb$$

$$T \rightarrow \lambda$$

5. Problem 14(h) on page 39 of the fifth edition, problem 17(h) on page 29 of the sixth edition.

We introduce a third variable,  $S'$ , which plays the same role as  $S$  does in the previous problem. The new start symbol  $S$  then generates arbitrarily many copies of  $S'$ , each of which generates a member of  $L_1$ .

$$S \rightarrow S'S$$

$$S \rightarrow \lambda$$

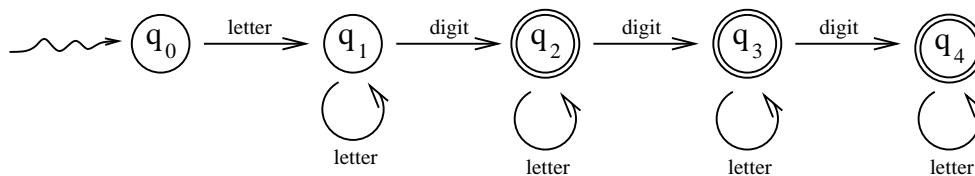
$$S' \rightarrow aS'b$$

$$S' \rightarrow Tb$$

$$T \rightarrow Tb$$

$$T \rightarrow \lambda$$

6. Problem 4 on page 44 of the fifth edition, problem 6 on page 35 of the sixth edition. Instead of showing all 26 letters and ten digits, we simplify the figure by simply writing "digit" instead of 0, 1, 2, 3, 4, 5, 6, 7, 8, 9, similarly for letters.



We use the DFA above and we introduce two variables,  $L$  for letter and  $D$  for digit. Our grammar has variables  $A_0, A_1, A_2, A_3, A_4, L, D$ , and the start symbol is  $A_0$ .

$$A_0 \rightarrow LA_1$$

$$A_1 \rightarrow DA_2|LA_1$$

$$A_2 \rightarrow DA_3|LA_2|\lambda$$

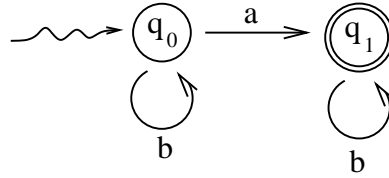
$$A_3 \rightarrow DA_4|LA_3|\lambda$$

$$A_4 \rightarrow LA_4|\lambda$$

$$L \rightarrow a|b|c|d|e|f|g|h|i|j|k|l|m|n|o|p|q|r|s|t|u|v|w|x|y|z$$

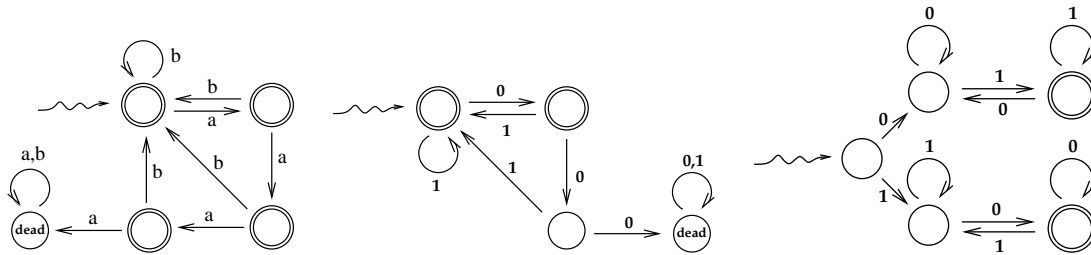
$$D \rightarrow 0|1|2|3|4|5|6|7|8|9$$

7. Problem 2(a) on page 56 of the fifth edition, problem 4(a) on page 48 of the sixth edition.



There is a dead state, not shown in the figure.

8. Problem 8(b), 9(a), 9(c) on page 56 of the fifth edition, problems 8(b), 11(a), 11(c) on page 49 of the sixth edition.

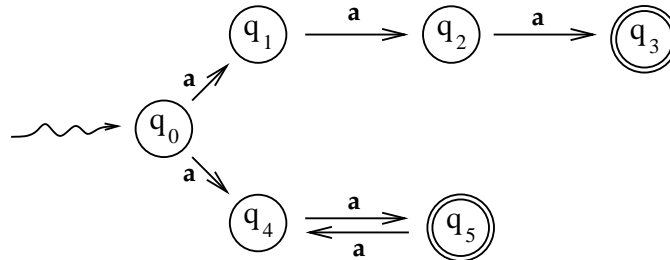


9. Problem 26 on page 58 of the fifth edition., problem 28 on page 51 of the sixth edition.

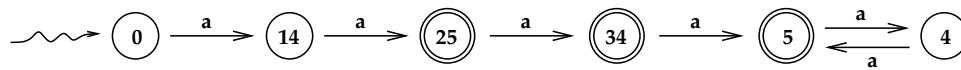
Figure 2.4 shows a DFA with four states, one of which is a dead state. If we apply the algorithm to find the minimal equivalent DFA, we will still have four states. Thus, the answer is no.

10. Problem 6 on page 63 of the fifth edition, problem 3 on page 57 of the sixth edition.

This is the NFA shown in Figure 2-8. Let's call it  $M$ .



We now apply the algorithm to convert an NFA into an equivalent DFA. Each state of the DFA is a subset of the set of states of  $M$ . Since  $M$  has 6 states, there are  $2^6 = 64$  such subsets altogether. Fortunately, most of those states are useless, and thus we don't need to include them in our figure. The only ones we show are  $\{q_0\}$ ,  $\{q_1, q_4\}$ ,  $\{q_2, q_5\}$ ,  $\{q_3, q_4\}$ ,  $\{q_5\}$ ,  $\{q_4\}$ . In the figure, we abbreviate these names as 0, 14, 25, 34, 5, and 4.



11. Problem 12 on page 64 of the fifth edition, problem 13 on page 57 of the sixth edition.  
The accepted strings are 01001 and 000.